



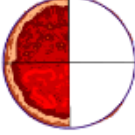
Riddle 6



Why was six
scared of seven?









What To Do.




In each problem, circle the fraction that is NOT equivalent to the other fractions. Match each answer to a letter in the Key. Then write the letter in the space above its problem number to find the answer to the riddle.

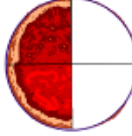

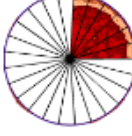
1   
 $\frac{1}{2}$ — —


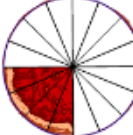

6   $\frac{5}{2}$
 — — —




2   
 — — —


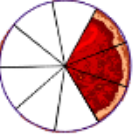

7   
 — — —

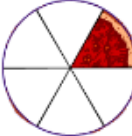


3   
 — — —

8   
 — — $\frac{\quad}{25}$

4   
 — — —

9   
 — — —

5   
 — — —

10   
 — — —